



10. Complete these additions!

1. $7+7+8=$

2. $9+8+2=$

3. $9+5+9=$



LANDING IN CINEMAS OCTOBER 2009

DISNEY DIGITAL
3D
IN SELECT CINEMAS
www.disneymovies.com

9. Ellie has 6 hours to clean the house she has done 4 hours already how many hours does she have left to clean?



Y

Your next clue is
on the new door

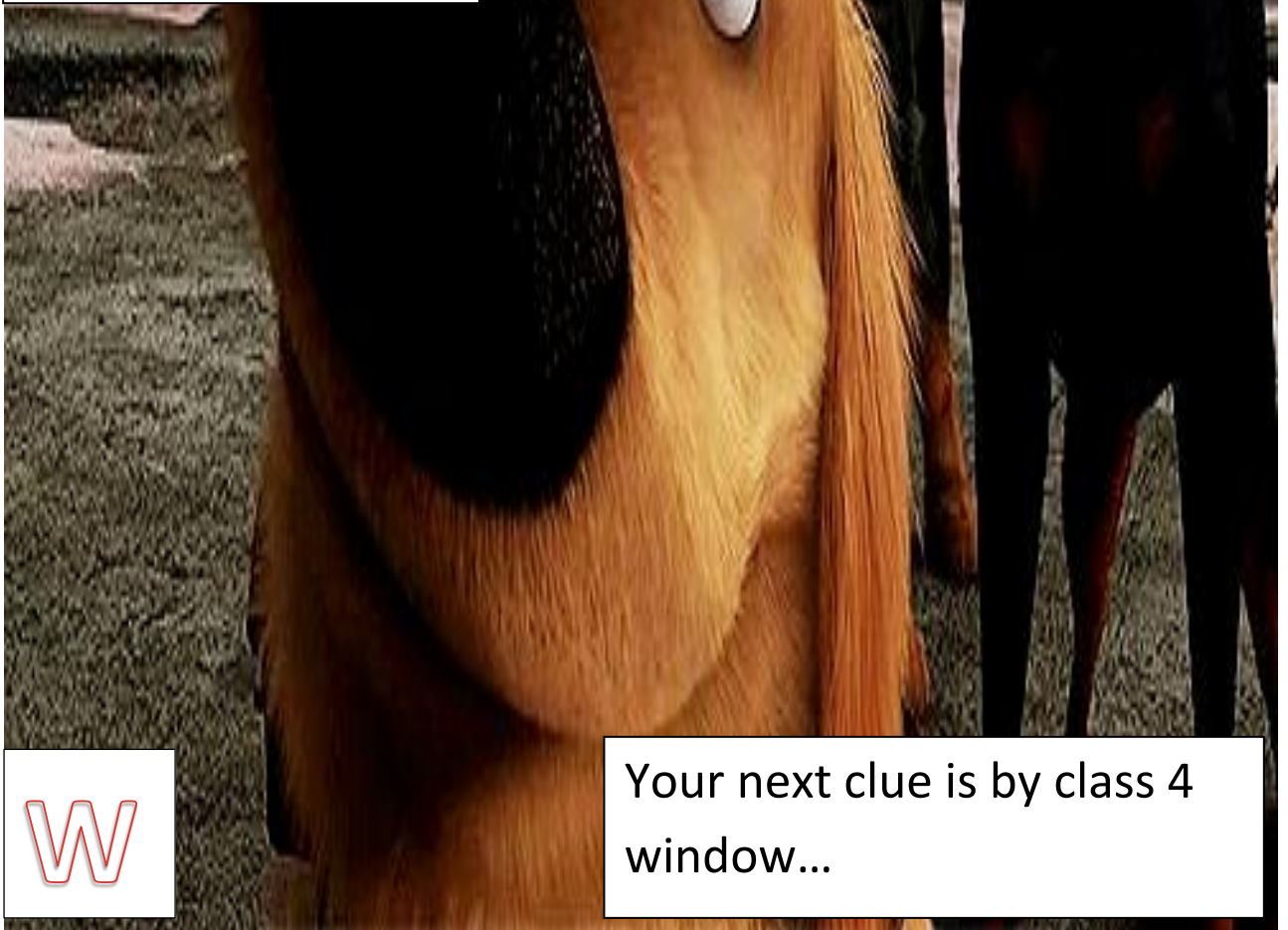
8. What times tables
does 4 appear in?



A

Your next clue is the
play equipment.

7. Dugg needs
£11.50 to buy a
new collar he has 2
five pound notes
and 2 pound coins
does he have
enough?



W

Your next clue is by class 4
window...

6. Which of these sums has the answer 22

A. $10+5=$

B. $12 +10=$

C. $11-5=$

A

The next clue is next to the garden shed ...



5. Solve the missing numbers in the 5 times table

5

—

15

—

25

30

35

—

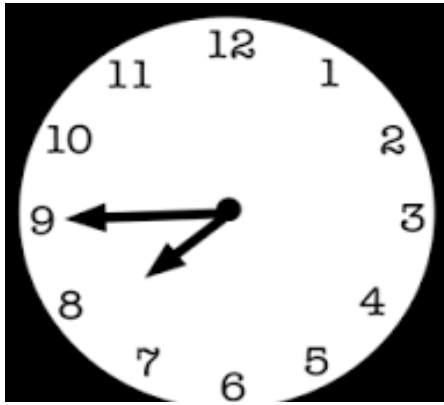
45

—

D

Your next clue is in the reflection garden.

1.What is the time?



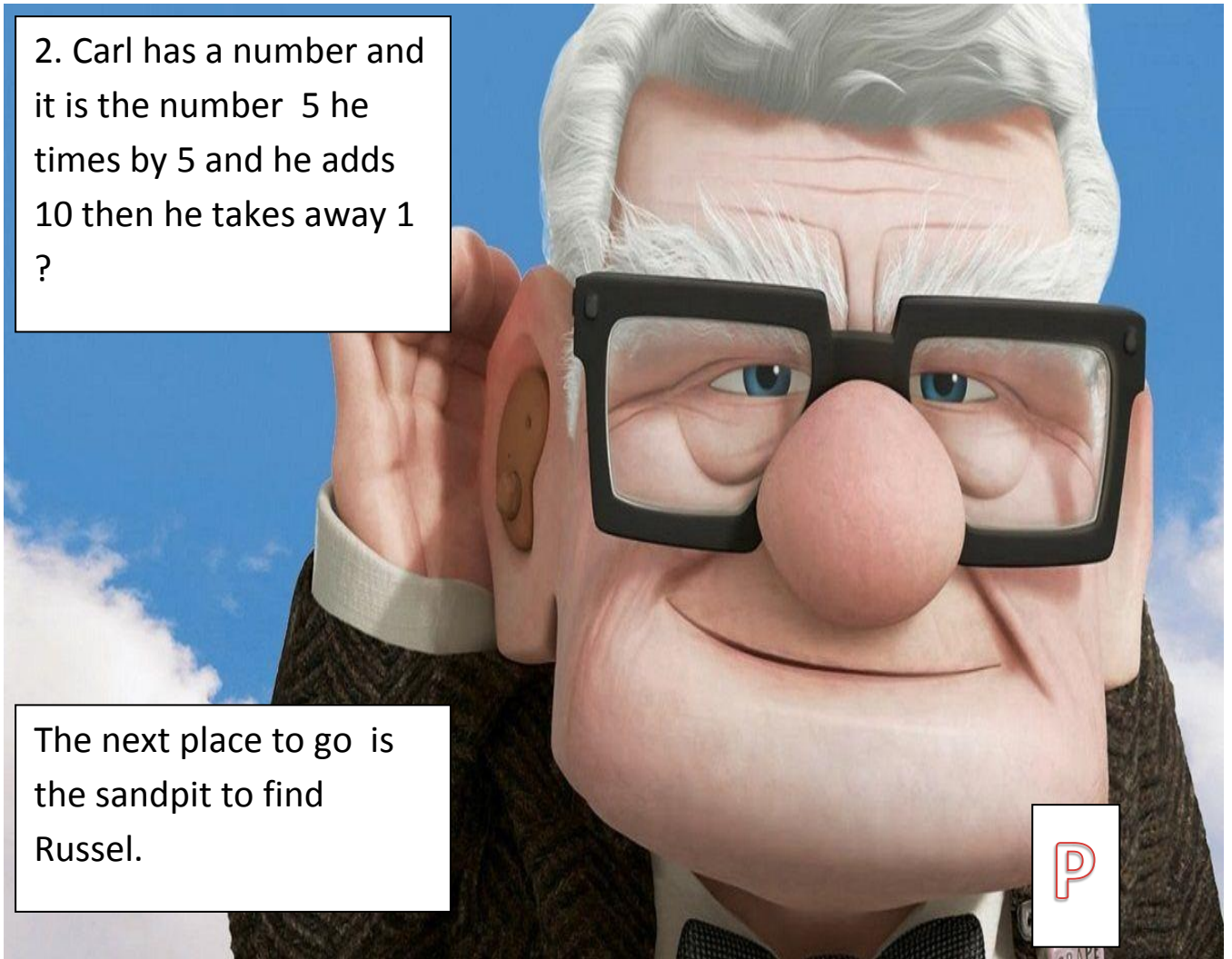
Your next clue is Carl in the shelter under the bench.



2. Carl has a number and it is the number 5 he times by 5 and he adds 10 then he takes away 1 ?

The next place to go is the sandpit to find Russel.

P



3. Solve these sums to help Russel get his last badge.

$$7 + \underline{\quad} = 23$$

$$5 \times \underline{\quad} = 25$$


$$9 - \underline{\quad} = 3$$



Your next clue is on the boat .

A

4. If there is 60 seconds in 1 minute how many seconds is in 2 minute



N

You next clue is in the PE shed.